
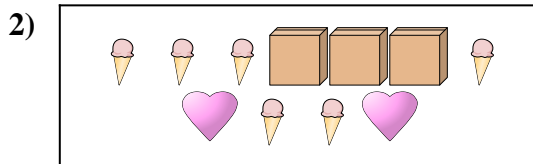





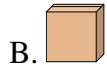
Compare the number of shapes.




Are there more or more ?



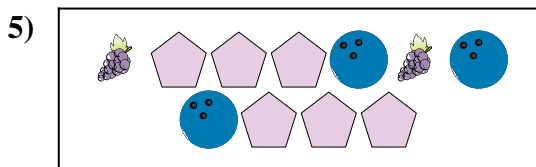
Are there more or more ?




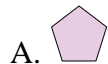
Are there less or less ?



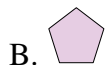
Are there less or less ?



Are there less or less ?



Are there less or less ?



Answers

1. _____

2. _____

3. _____


4. _____

5. _____

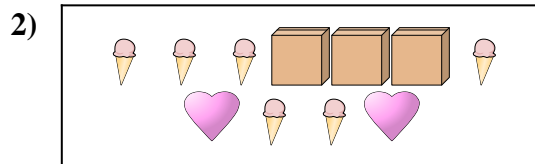
6. _____




Compare the number of shapes.




Are there more or more ?



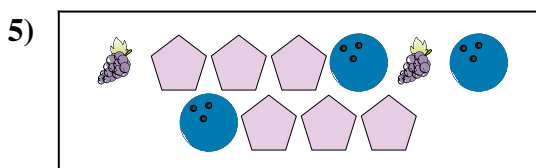
Are there more or more ?




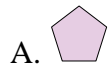
Are there less or less ?



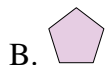
Are there less or less ?



Are there less or less ?



Are there less or less ?



Answers

1. **B**

2. **B**

3. **A**

4. **A**

5. **B**

6. **B**